

Name _____

Date _____

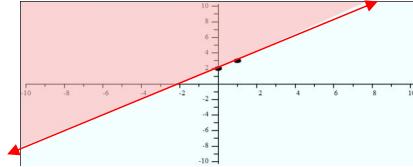
Graphing Linear Inequalities as a Half-Plane - Matching Worksheet

Match the equations to their graph.

B

1. Graph this inequality:
 $y \geq x + 6$

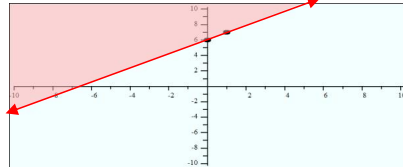
a.



E

2. Graph this inequality:
 $y < -4$

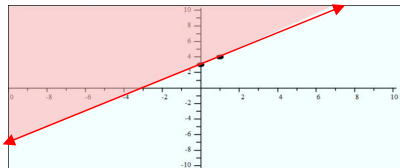
b.



A

3. Graph this inequality:
 $y \geq x + 2$

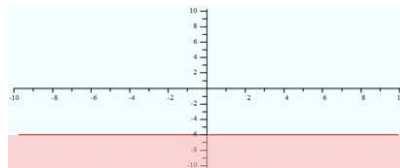
c.



D

4. Graph this inequality:
 $y < -6$

d.



C

5. Graph this inequality:
 $y \geq x + 3$

e.

